



Determine which letter best represents the sum.

1) $\frac{7}{8} + \frac{7}{8}$

2) $\frac{3}{12} + \frac{3}{12}$

3) $\frac{2}{12} + \frac{11}{12}$

4) $\frac{6}{12} + \frac{5}{12}$

5) $\frac{1}{2} + \frac{1}{2}$

6) $\frac{2}{5} + \frac{2}{5}$

7) $\frac{1}{6} + \frac{5}{6}$

8) $\frac{4}{12} + \frac{3}{12}$

9) $\frac{4}{5} + \frac{2}{5}$

10) $\frac{1}{12} + \frac{11}{12}$

11) $\frac{3}{4} + \frac{1}{4}$

12) $\frac{4}{10} + \frac{3}{10}$

13) $\frac{2}{12} + \frac{1}{12}$

14) $\frac{6}{12} + \frac{8}{12}$

Answers

1. _____

2. _____

3. _____

4. _____

5. _____

6. _____

7. _____

8. _____

9. _____

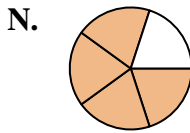
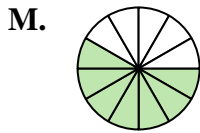
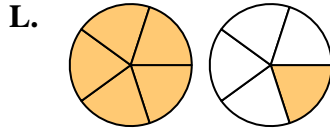
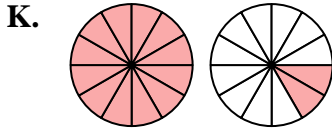
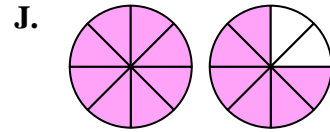
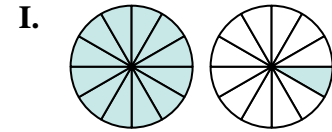
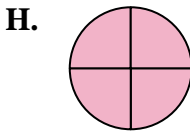
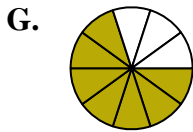
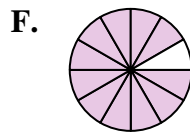
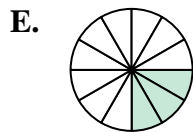
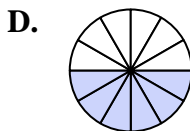
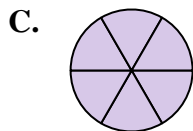
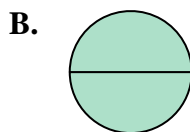
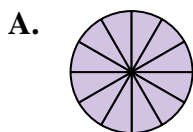
10. _____

11. _____

12. _____

13. _____

14. _____





Determine which letter best represents the sum.

1) $\frac{7}{8} + \frac{7}{8}$

2) $\frac{3}{12} + \frac{3}{12}$

3) $\frac{2}{12} + \frac{11}{12}$

4) $\frac{6}{12} + \frac{5}{12}$

5) $\frac{1}{2} + \frac{1}{2}$

6) $\frac{2}{5} + \frac{2}{5}$

7) $\frac{1}{6} + \frac{5}{6}$

8) $\frac{4}{12} + \frac{3}{12}$

9) $\frac{4}{5} + \frac{2}{5}$

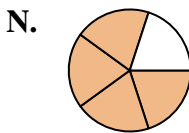
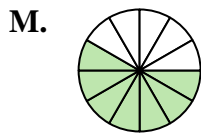
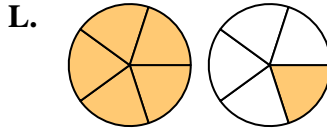
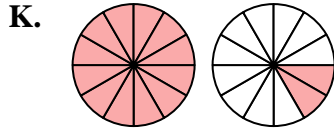
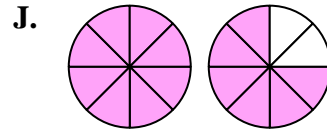
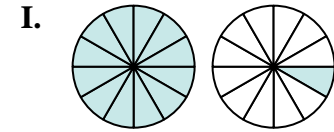
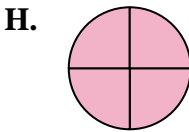
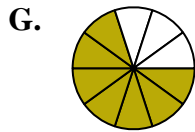
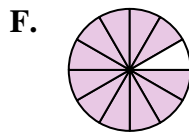
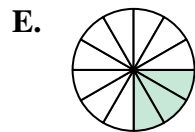
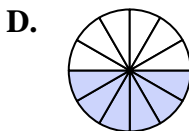
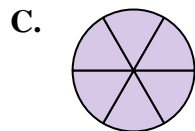
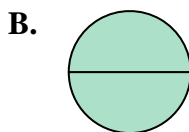
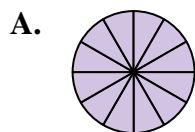
10) $\frac{1}{12} + \frac{11}{12}$

11) $\frac{3}{4} + \frac{1}{4}$

12) $\frac{4}{10} + \frac{3}{10}$

13) $\frac{2}{12} + \frac{1}{12}$

14) $\frac{6}{12} + \frac{8}{12}$



Answers

1. **J** $1\frac{6}{8}$

2. **D** $\frac{6}{12}$

3. **I** $1\frac{1}{12}$

4. **F** $\frac{11}{12}$

5. **B** $\frac{2}{2}$

6. **N** $\frac{4}{5}$

7. **C** $\frac{6}{6}$

8. **M** $\frac{7}{12}$

9. **L** $1\frac{1}{5}$

10. **A** $\frac{12}{12}$

11. **H** $\frac{4}{4}$

12. **G** $\frac{7}{10}$

13. **E** $\frac{3}{12}$

14. **K** $1\frac{2}{12}$